

Time: 10 Minutes

Paper Math 2

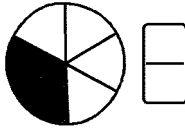
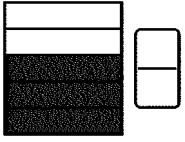
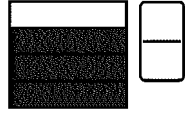
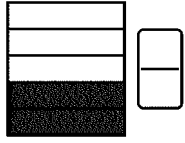
Total Marks: 10

3rd Month, 3rd Week, 4th Day

Syllabus: Ex # 2. Q # 1.

Q.1. Look at the coloured part of each shape and write the fraction.

دی گئی اشکال کے رنگ دار حصے کو دیکھیں اور فرکشن لکھیں۔



Time: 10 Minutes

Paper Math 2

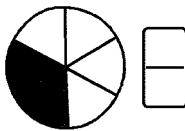
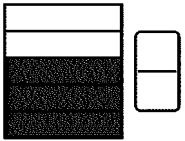
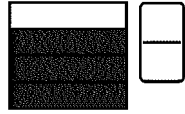
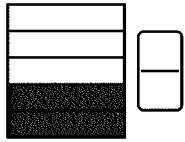
Total Marks: 10

3rd Month, 3rd Week, 4th Day

Syllabus: Ex # 2. Q # 1.

Q.1. Look at the coloured part of each shape and write the fraction.

دی گئی اشکال کے رنگ دار حصے کو دیکھیں اور فرکشن لکھیں۔



Time: 10 Minutes

Paper Math 2

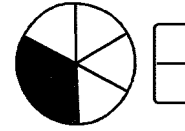
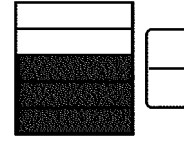

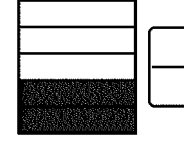
Total Marks: 10

3rd Month, 3rd Week, 4th Day

Syllabus: Ex # 2. Q # 1.

Q.1. Look at the coloured part of each shape and write the fraction.

دی گئی اشکال کے رنگ دار حصے کو دیکھیں اور فرکشن لکھیں۔



Time: 10 Minutes

Paper Math 2

Total Marks: 10

3rd Month, 3rd Week, 4th Day

Syllabus: Ex # 2. Q # 1.

Q.1. Look at the coloured part of each shape and write the fraction.

دی گئی اشکال کے رنگ دار حصے کو دیکھیں اور فرکشن لکھیں۔

